

Dela upp tal

0 - 1000

$$6 \text{ st } \begin{array}{|c|} \hline 100 \\ \hline \text{ETT HUNDRA KRONOR} \\ \hline \end{array} \begin{array}{|c|} \hline 10 \\ \hline \text{TIO KRONOR} \\ \hline \end{array} 5 \text{ st } \begin{array}{|c|} \hline 10 \\ \hline \text{TIO KRONOR} \\ \hline \end{array} 7 \text{ st } \begin{array}{|c|} \hline 1 \\ \hline \text{EN KRONA} \\ \hline \end{array} = 657 \text{ kr}$$


$$\underline{\quad} \text{ st } \begin{array}{|c|} \hline 100 \\ \hline \text{ETT HUNDRA KRONOR} \\ \hline \end{array} \underline{\quad} \text{ st } \begin{array}{|c|} \hline 10 \\ \hline \text{TIO KRONOR} \\ \hline \end{array} \underline{\quad} \text{ st } \begin{array}{|c|} \hline 1 \\ \hline \text{EN KRONA} \\ \hline \end{array} = 743 \text{ kr}$$

$$\underline{\quad} \text{ st } \begin{array}{|c|} \hline 100 \\ \hline \text{ETT HUNDRA KRONOR} \\ \hline \end{array} \underline{\quad} \text{ st } \begin{array}{|c|} \hline 10 \\ \hline \text{TIO KRONOR} \\ \hline \end{array} \underline{\quad} \text{ st } \begin{array}{|c|} \hline 1 \\ \hline \text{EN KRONA} \\ \hline \end{array} = 592 \text{ kr}$$

$$\underline{\quad} \text{ st } \begin{array}{|c|} \hline 100 \\ \hline \text{ETT HUNDRA KRONOR} \\ \hline \end{array} \underline{\quad} \text{ st } \begin{array}{|c|} \hline 10 \\ \hline \text{TIO KRONOR} \\ \hline \end{array} \underline{\quad} \text{ st } \begin{array}{|c|} \hline 1 \\ \hline \text{EN KRONA} \\ \hline \end{array} = 684 \text{ kr}$$

$$\underline{\quad} \text{ st } \begin{array}{|c|} \hline 100 \\ \hline \text{ETT HUNDRA KRONOR} \\ \hline \end{array} \underline{\quad} \text{ st } \begin{array}{|c|} \hline 10 \\ \hline \text{TIO KRONOR} \\ \hline \end{array} \underline{\quad} \text{ st } \begin{array}{|c|} \hline 1 \\ \hline \text{EN KRONA} \\ \hline \end{array} = 851 \text{ kr}$$

$$\underline{\quad} \text{ st } \begin{array}{|c|} \hline 100 \\ \hline \text{ETT HUNDRA KRONOR} \\ \hline \end{array} \underline{\quad} \text{ st } \begin{array}{|c|} \hline 10 \\ \hline \text{TIO KRONOR} \\ \hline \end{array} \underline{\quad} \text{ st } \begin{array}{|c|} \hline 1 \\ \hline \text{EN KRONA} \\ \hline \end{array} = 999 \text{ kr}$$



Överslagsräkning 1 0 - 1000

Elsa köper saker till sin trädgård. Hur mycket får hon ungefär betala?




9 kr



19 kr

9 kr är ungefär lika med 10 kr
19 kr är ungefär lika med 20 kr

$$10 \text{ kr} + 20 \text{ kr} = \underline{\quad} \text{ kr}$$



29 kr



49 kr



69 kr

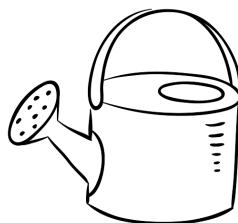
$$\underline{\quad} \text{ kr} + \underline{\quad} \text{ kr} + \underline{\quad} \text{ kr} = \underline{\quad} \text{ kr}$$



39 kr



59 kr



79 kr

$$\underline{\quad} \text{ kr} + \underline{\quad} \text{ kr} + \underline{\quad} \text{ kr} = \underline{\quad} \text{ kr}$$