

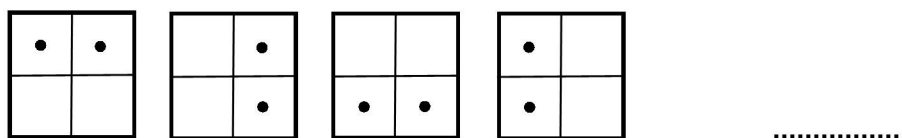
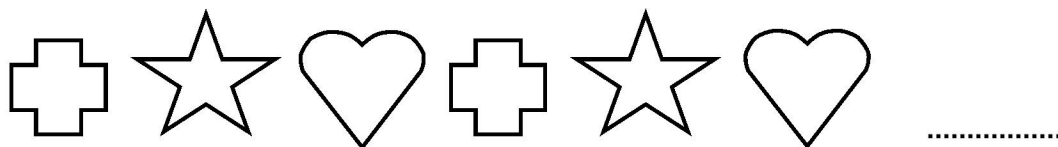


Figurer i långa rader

Titta på de olika figurerna i de olika raderna!

Kan du se att de olika figurerna i varje rad är placerade enligt ett visst mönster?

Kan du lista ut vilken figur som blir nästa i varje rad?

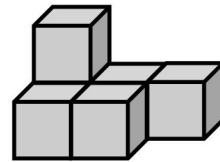
Rita figuren sist i raden!



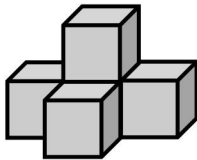
Hur många klossar kan du se?

De här figuren är uppbyggd av sex små klossar.


Hur många klossar finns det i varje figur här nedanför?



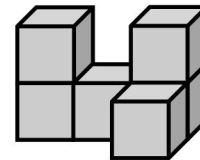
A



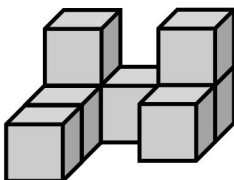
B



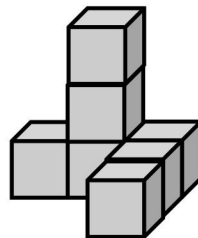
C



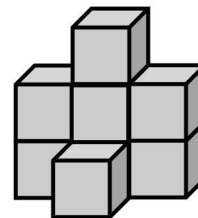
D



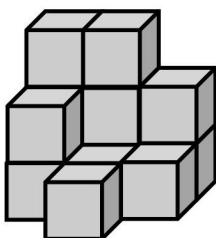
E



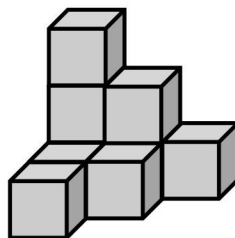
F



G



H



I

